

 **Primary 3 Science (Term 1) - School NH** 
[Duplicate](#)[Print](#)[Delete](#)[Assign Test](#)**Test Introduction**[+ Add Introduction](#)**14 Questions** (20 Points)Question Bank: 19,439 Questions 

Test Questions

1 Test Assignment

Question 1

Primary 3 Science » Primary 3 Science (Term 1)

2 pts

Section A

For each question four options are given. One of them is the correct answer. Make your choice.

Study the classification table below.

.. Things around us	
Living Things	Non-living Things
Cat	Scooter
Turtle	Plant
Parrot	Pen

Which one of the things above has been classified wrongly?

- A) Turtle
- B) Parrot
- ✓ C) Plant
- D) Pen

Question Type: Multiple Choice
Randomize Answers: No
Date Added: Sun 12th Jan 2020
Last Modified: N/A
QID#: 18,429,495

[Answers](#) | [Edit](#) | [Duplicate](#) | [Used In](#) | [Reorder](#)
[Remove From Test](#)**Question 2**

Primary 3 Science » Primary 3 Science (Term 1)

2 pts

Which one of the following does not need air, food and water to survive?

- A) Dog
- B) Girl
- C) Bacteria
- ✓ D) Ball

Question Type: Multiple Choice
Randomize Answers: No
Date Added: Sun 12th Jan 2020
Last Modified: N/A
QID#: 18,429,498

[Answers](#) | [Edit](#) | [Duplicate](#) | [Used In](#) | [Reorder](#)

[Remove From Test](#)

Question 3

Primary 3 Science » Primary 3 Science (Term 1)

2 pts

Study the picture of Organism A below.



Organism A

Which group of animals does Organism A belong to?

- A) Reptile
- B) Amphibian
- ✓ C) Bird
- D) Fish

Question Type: Multiple Choice
Randomize Answers: No
Date Added: Sun 12th Jan 2020
Last Modified: N/A
QID#: 18,429,516

[Answers](#) | [Edit](#) | [Duplicate](#) | [Used In](#) | [Reorder](#)

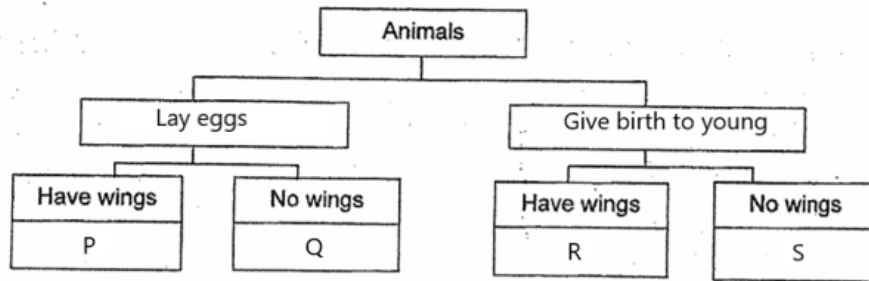
[Remove From Test](#)

Question 4

Primary 3 Science » Primary 3 Science (Term 1)

2 pts

Study the classification chart below.



Which of the following correctly represent P, Q, R and S?

- ✓ A) Duck, Angelfish, Bat, Cat
- B) Angelfish, Duck, Cat, Bat
- C) Cat, Bat, Angelfish, Duck
- D) Bat, Cat, Duck, Angelfish

Question Type: Multiple Choice
Randomize Answers: No
Date Added: Sun 12th Jan 2020
Last Modified: N/A
QID#: 18,429,523

[Answers](#) | [Edit](#) | [Duplicate](#) | [Used In](#) | [Reorder](#)

[Remove From Test](#)

Question 5

Primary 3 Science » Primary 3 Science (Term 1)

2 pts

Adam observed the two objects below at a park.



Bench



Plant

Which one of the following statements about the two objects is correct?

- A) Both of them can reproduce.
- B) Both of them can make food.
- ✓ C) The plant can respond to changes but the bench cannot.
- D) The plant can move from place to place but the bench cannot.

Question Type: Multiple Choice
Randomize Answers: No
Date Added: Sun 12th Jan 2020
Last Modified: N/A
QID#: 18,429,531

[Answers](#) | [Edit](#) | [Duplicate](#) | [Used In](#) | [Reorder](#)

[Remove From Test](#)

Question 6

Primary 3 Science » Primary 3 Science (Term 1)

2 pts

James bought ten fishes for his fish tank. He noticed that the number of fishes increased over a period of time even though he did not add any new fish into his tank. The table below shows the number of fish in the tank over a period of twelve months.

Number of months	Number of fishes in the tank
0	10
4	15
8	20
12	25

Why did the number of fishes in the tank increase over a period of twelve month?

- A) Some of the fish died.
- B) Some of the fish grew.
- ✓ C) Some of the fish reproduced.
- D) Some of the fish responded to the changes in the tank.

Question Type: Multiple Choice
Randomize Answers: No
Date Added: Sun 12th Jan 2020
Last Modified: N/A
QID#: 18,429,542

[↶ Answers](#) | [✎ Edit](#) | [📄 Duplicate](#) | [📌 Used In](#) | [⬇ Reorder](#)

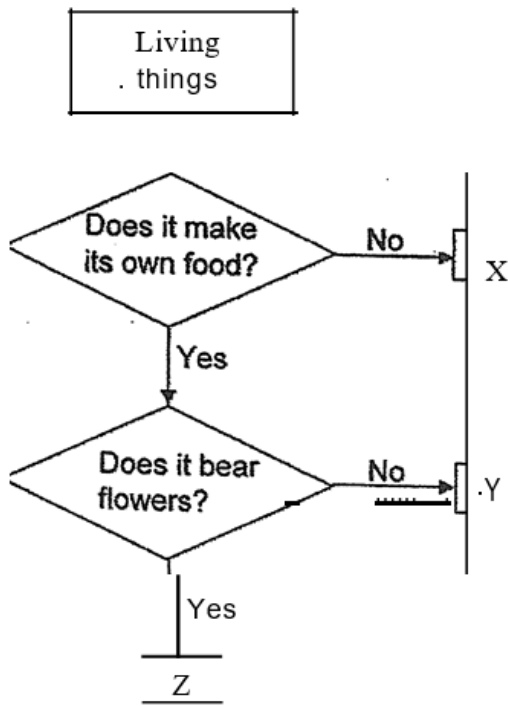
[Remove From Test](#)

Question 7

Primary 3 Science » Primary 3 Science (Term 1)

2 pts

Study the flow chart below.



What do X, Y and Z represent?

- A) Duck, Fern, Mouse
- ✓ B) Angelfish, Moss, Lily
- C) Moss, Angelfish, Duck
- D) Mouse, Lily, Moss

Question Type: Multiple Choice
Randomize Answers: No
Date Added: Sun 12th Jan 2020
Last Modified: N/A
QID#: 18,429,553

[Answers](#) | [Edit](#) | [Duplicate](#) | [Used In](#) | [Reorder](#)

[Remove From Test](#)

Question 8

Primary 3 Science » Primary 3 Science (Term 1)

2 pts

Which of the following about the similarity between trees and birds is correct?

- A) Both of them have roots.
- B) Both of them can make food.
- C) Both of them can move from place to place.
- ✓ D) Both of them can grow.

Question Type: Multiple Choice
Randomize Answers: No
Date Added: Sun 12th Jan 2020
Last Modified: N/A
QID#: 18,429,556

[Answers](#) | [Edit](#) | [Duplicate](#) | [Used In](#) | [Reorder](#)

[Remove From Test](#)

Question 9

Primary 3 Science » Primary 3 Science (Term 1)

0 pts

Section B

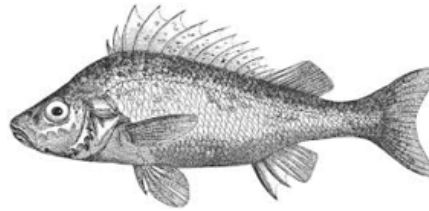
This question is designed for extended answers that parent/ teacher will have to assign and guide child to attempt after the test has been completed.

Grading: This question type is not graded on this system and will not affect the final score as it was designed in such a way that it requires manual assistance.

Study the two animals below.



Animal A



Animal B

Based on the pictures, state two observable differences between Animal A and Animal B. (Do NOT compare their shapes, sizes and colours.)

Question Type: Essay
Date Added: Sun 12th Jan 2020
Last Modified: Wed 13th May 2020
QID#: 18,429,646

Correctly answered feedback

- (i) Animal A has three body parts and animal B does not.
- (ii) Animal A has hard outer-covering but animal B has scales.

Incorrectly answered feedback

- (i) Animal A has three body parts and animal B does not.
- (ii) Animal A has hard outer-covering but animal B has scales.

[Answers](#) | [Edit](#) | [Duplicate](#) | [Used In](#) | [Reorder](#)

[Remove From Test](#)

Question 10

Primary 3 Science » Primary 3 Science (Term 1)

2 pts

Study the pictures of the four animals below carefully.



Frog



Cat



Snake



Bird

Choose the correct classification of animals based on their outer coverings.

- A) Hair - Bird
 Feathers - Snake
 Scales - Frog
 Moist skin - Cat

- B) Hair - Snake
Feathers - Frog
Scales - Cat
Moist skin - Bird
- C) Hair - Frog
Feathers - Cat
Scales - Bird
Moist skin - Snake
- ✓ D) Hair - Cat
Feathers - Bird
Scales - Snake
Moist skin - Frog

Question Type: Multiple Choice
Randomize Answers: No
Date Added: Sun 12th Jan 2020
Last Modified: N/A
QID#: 18,429,667

[Answers](#) | [Edit](#) | [Duplicate](#) | [Used In](#) | [Reorder](#)

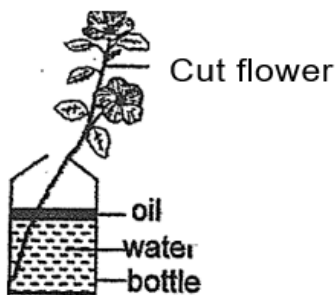
[Remove From Test](#)

Question 11

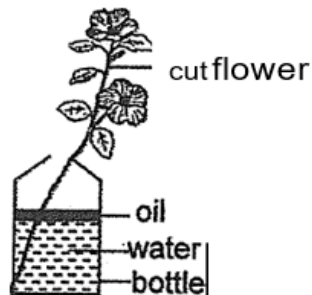
Primary 3 Science » Primary 3 Science (Term 1)

0 pts

Ben conducted an experiment using the two set-ups below.



Set-up X



Set-up Y

He measured the amount of water left in the bottles of Set-ups X and Y every hour from 3 p.m. to 6 p.m. He recorded his findings in the table below.

Time	Amount of water left in the bottle (ml)	
	Set-up X	Set-up Y
3 p.m.	600	600
4 p.m.	570	600
5 p.m.	540	600
6 p.m.	510	600

(a) Based on the table, which set-up (X or Y) contained a plastic cut flower?
Give a reason for your answer.

This question is designed for extended answers that parent/ teacher will have to assign and guide child to attempt after the test has been completed.

Grading: This question type is not graded on this system and will not affect the final score as it was designed in such a way that it requires manual assistance.

Question Type: Essay
Date Added: Sun 12th Jan 2020
Last Modified: Wed 13th May 2020
QID#: 18,429,685

Correctly answered feedback

Set-up Y. It did not take in any water.

Incorrectly answered feedback

Set-up Y. It did not take in any water.

[Answers](#) | [Edit](#) | [Duplicate](#) | [Used In](#) | [Reorder](#)

[Remove From Test](#)**Question 12**

Primary 3 Science » Primary 3 Science (Term 1)

0 pts

Rachel chased after some birds at the ground. When the birds heard Rachel's footsteps, they flew away.



State one characteristic of living things shown by the birds when they flew away.

This question is designed for extended answers that parent/ teacher will have to assign and guide child to attempt after the test has been completed.

Grading: This question type is not graded on this system and will not affect the final score as it was designed in such a way that it requires manual assistance.

Question Type: Essay
Date Added: Sun 12th Jan 2020
Last Modified: Wed 13th May 2020
QID#: 18,429,692

Correctly answered feedback

Animal respond to changes around them.

Incorrectly answered feedback

Animal respond to changes around them.

[Answers](#) | [Edit](#) | [Duplicate](#) | [Used In](#) | [Reorder](#)

[Remove From Test](#)**Question 13**

Primary 3 Science » Primary 3 Science (Term 1)

2 pts

The table below shows the characteristics of four living things (P, Q, R and S).
 A tick means that the living thing has that characteristic.

Characteristic Living thing	Makes its own food	Lays eggs	Gives birth	Has flowers
P	✓			
Q		✓		
R	✓			✓
S			✓	

a) Which of the things, P, Q, R or S, is a non-flowering plant?

Accepted answers:

✓ P

Question Type: Free Text
 Date Added: Sun 12th Jan 2020
 Last Modified: Wed 13th May 2020
 QID#: 18,429,701

Correctly answered feedback

P is a non-flowering plant

Incorrectly answered feedback

P is a non-flowering plant

[Answers](#) |
 [Edit](#) |
 [Duplicate](#) |
 [Used In](#) |
 [Reorder](#)

[Remove From Test](#)

Question 14

Primary 3 Science » Primary 3 Science (Term 1)

0 pts

The table below shows the characteristics of four living things (P, Q, R and S).
 A tick means that the living thing has that characteristic.

Characteristic Living thing	Makes its own food	Lays eggs	Gives birth	Has flowers
P	✓			
Q		✓		
R	✓			✓
S			✓	

b) Give an example of S.

This question is designed for extended answers that parent/ teacher will have to assign and guide child to attempt after the test has been completed.

Grading: This question type is not graded on this system and will not affect the final score as it was designed in such a way that it requires manual assistance.

Question Type: Essay
 Date Added: Sun 12th Jan 2020
 Last Modified: Wed 13th May 2020
 QID#: 18,429,704

Correctly answered feedback

Cow

Incorrectly answered feedback

Cow

[Answers](#) | [Edit](#) | [Duplicate](#) | [Used In](#) | [Reorder](#)

[Remove From Test](#)